

Problem 1. Set of questions (11p = 32%)

(a) Are the following statements true or false (T/F)? To obtain maximum scores you must explain your answers properly.

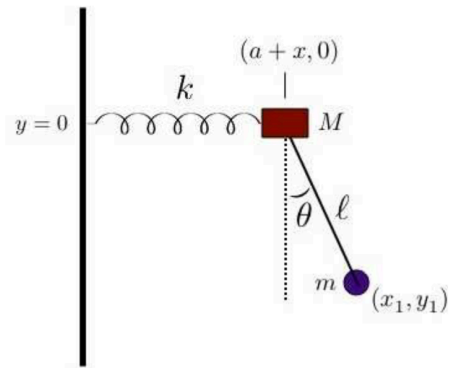
- i. "The method of Lagrange's undetermined multipliers can only be used with holonomic constraints." [6p]
- ii. "Two events whose 4-vector points outside the light cone can be causally connected."
- iii. "Kepler orbits are circular." [6p]

(b) Derive the answer for the following equation by starting from the formal definition of Poisson brackets: $[L_z, L_y]_{q,p} = ?$ [2p]

(c) Petter owns a Tesla car ($m = 2200$ kg). In a rush of endorphins and reckless behavior, he momentarily drives 250 km/h towards Værnes (East). The latitude is 63.25° . Calculate the direction and magnitude of the Coriolis force. [3p]

Problem 2. Pendulum attached on a harmonic oscillator (8p = 24%)

Consider next the system depicted in the figure right in which a mass M moves horizontally while attached to a spring of spring constant k . Hanging from this mass is a pendulum of arm length l and bob mass m .

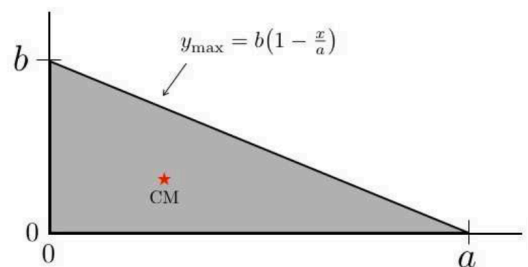


- (a) Determine the Lagrangian function of the system by choosing appropriate generalized coordinates and derive the associated canonical momenta and canonical forces. [4p]
- (b) Derive the equations of motion from the Lagrange's equations. [2p]
- (c) Let us assume now that we are at the limit of small oscillations. Derive the simplified Lagrange's equations of motion by using the following definitions

$$u = \frac{x}{l}, \quad \alpha = \frac{m}{M}, \quad \omega_0^2 = \frac{k}{M}, \quad \omega_1^2 = \frac{g}{l} \quad [2p]$$

Problem 3. Principal moments of inertia of a triangular slab (9p = 26%)

- (a) Compute the center-of-mass (COM) for the planar triangle in the figure right, assuming it to be of uniform two-dimensional mass density ρ . [2p]
- (b) Compute the inertia tensor *with respect to the origin* for the same triangle. [3p]
- (c) If the origin is shifted in the COM, the inertia tensor becomes (this can be shown by using the parallel axis theorem)



$$I^{COM} = \frac{M}{18} \begin{pmatrix} b^2 & \frac{1}{2}ab & 0 \\ \frac{1}{2}ab & a^2 & 0 \\ 0 & 0 & a^2 + b^2 \end{pmatrix} = \begin{pmatrix} I_{xx} & I_{xy} & 0 \\ I_{yx} & I_{yy} & 0 \\ 0 & 0 & I_{zz} \end{pmatrix}$$

where $I_{xy} = I_{yx}$ and $I_{zz} = I_{xx} + I_{yy}$ in the general (latter) form. Define next

$$A = \frac{1}{2}(I_{xx} + I_{yy})$$

$$B = \sqrt{\frac{1}{4}(I_{xx} - I_{yy})^2 + I_{xy}^2}$$

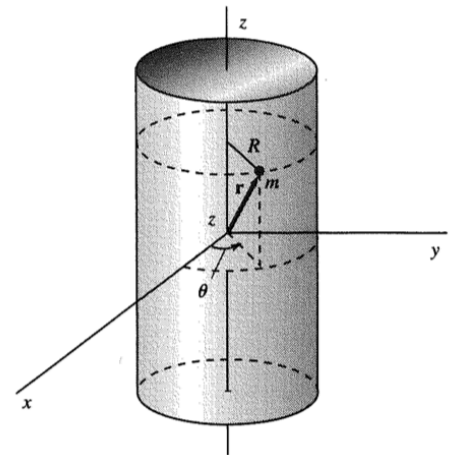
$$\vartheta = \tan^{-1}\left(\frac{2I_{xy}}{I_{xx} - I_{yy}}\right)$$

Derive the principal moments of inertia and principal axes of inertia by using the general form of the inertia tensor and these new variables. [4p]

Problem 4. Hamiltonian dynamics on a cylinder surface (6p = 18%)

Use the Hamiltonian method to find the equations of motion of a particle of mass m constrained to move on a cylinder surface defined by $x^2 + y^2 = R^2$. The particle is subject to a force directed towards the origin and squarely proportional to the distance from the origin: $F = -kr^2$.

- (a) Derive the Hamiltonian function and the Hamiltonian equations of motion. [4p]
- (b) Derive the final equation of motion for the z-coordinate. What can you say about conserved quantities? [2p]



Some useful formula and equations in the next page: