

## Øving 4

Guidance: Monday February 2

To be delivered by: Thursday February 5

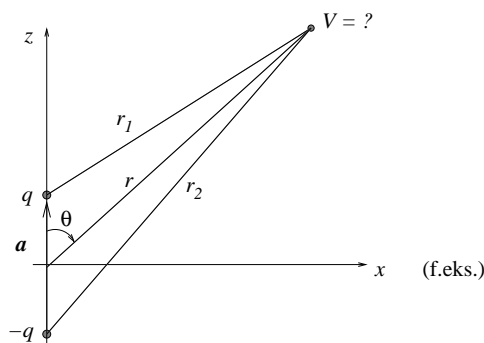
### Exercise 1

Assume we have a uniform electric field  $\mathbf{E} = E_0 \hat{x}$ . Determine the potential difference between the origin and the following points  $(x, y)$  in the  $xy$  plane:

- (i)  $(a, 0)$                       (ii)  $(0, a)$                       (iii) the point  $(a, a)$

### Exercise 2

An *electric dipole* is located along the  $z$ -axis with the centre at the origin, as shown in the figure. The electric *dipole moment* is defined as  $\mathbf{p} = q\mathbf{a}$ , where  $\mathbf{a} = a \hat{z}$  is the vector from  $-q$  to  $q$ .



Since we here obviously must have *symmetry* with respect to a rotation around the  $z$ -axis, it is sufficient to investigate a plane containing the  $z$ -axis. We have here chosen the  $xz$  plane.

Further, we may choose between cartesian coordinates  $(x, z)$  or polar coordinates  $(r, \theta)$  in order to denote an arbitrary position in this plane. We will use both in this exercise. The polar angle  $\theta$  may be chosen with respect to any one of the cartesian axes. Here, we let  $\theta$  denote the angle between  $\mathbf{r}$  and the  $z$  axis (see figure).

a) First, write down the relation between the cartesian coordinates  $(x, z)$  and the polar coordinates  $(r, \theta)$ . I.e., determine  $x(r, \theta)$ ,  $z(r, \theta)$  and  $r(x, z)$ .

b) Show that the potential from such a dipole, in cartesian coordinates, becomes

$$V(x, z) = \frac{q}{4\pi\epsilon_0} \left( \frac{1}{\sqrt{x^2 + (z - a/2)^2}} - \frac{1}{\sqrt{x^2 + (z + a/2)^2}} \right)$$

What is the potential on the  $x$  axis,  $V(x, 0)$ ? What is the potential on the  $z$  axis,  $V(0, z)$ ? (I.e., on the *complete*  $z$  axis; be careful with the signs...!) Draw a sketch of the function  $V(0, z)$ .

c) Show that far away from the dipole (i.e.,  $r \gg a$ ), the potential is to a good approximation given (in polar coordinates) by

$$V(r, \theta) = \frac{p \cos \theta}{4\pi\epsilon_0 r^2} = \frac{\mathbf{p} \cdot \mathbf{r}}{4\pi\epsilon_0 r^3}$$

Hint: Start with

$$\frac{1}{r_1} - \frac{1}{r_2} = \frac{r_2 - r_1}{r_1 r_2}$$

and use the figure to find an approximate expression for this when  $r \gg a$ .


Whereas the potential from a single point charge goes to zero as  $1/r$ , the potential from a dipole goes *faster* to zero, namely as  $1/r^2$ . Is this result reasonable?

Comment: If you insist on a more rigid mathematical approach to things like this, we are talking about finding  $V(r, \theta)$  “to leading order” in the small parameter  $a/r$ . In other words, the given expression for  $V(r, \theta)$  is *exact* for a so-called *ideal dipole* with “zero extent” (i.e., in the limit  $a \rightarrow 0$ , keeping the value of  $p$  constant).

*Exercise 3 (from the Midterm exam 10.10.03)*

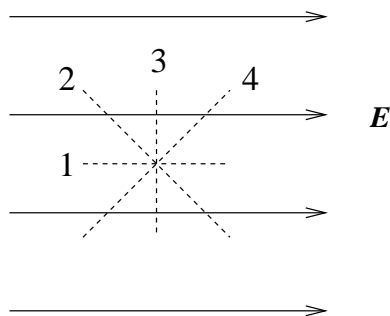
a) The figure shows field lines for a uniform electric field. An electron which is placed in this field will

- A move with constant speed to the left.
- B move with constant speed to the right.
- C be accelerated to the left.
- D be accelerated to the right.



b) The figure shows a uniform electric field  $\mathbf{E}$  (solid lines). Along which stapled line does the potential remain unchanged?

- A 1
- B 2
- C 3
- D 4

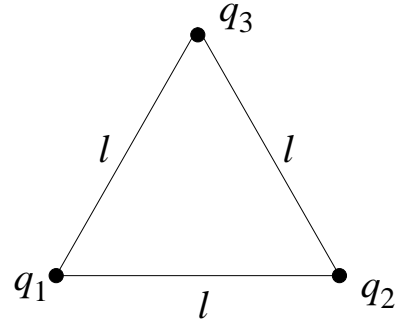


c) Which of the following statements is correct?

- A Equipotential surfaces for a point charge are cubes concentric with the charge.
- B Electric potential is a vector.
- C Electric potential is measured in units of N/C.
- D Equipotential surfaces are perpendicular to electric field lines.

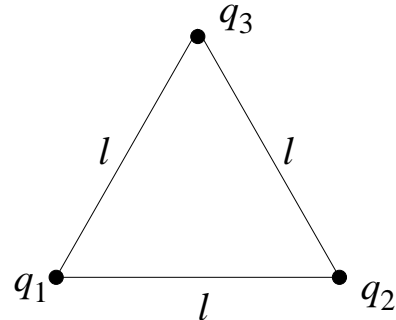
d) Three point charges  $q_1 = 5\mu\text{C}$ ,  $q_2 = 10\mu\text{C}$  and  $q_3 = 15\mu\text{C}$  are placed in the corners of an equilateral triangle with sides  $l = 50\text{ cm}$ . The potential energy of the system is

- A 4.95 J
- B 5.95 J
- C 6.95 J
- D 7.95 J



e) Three point charges  $q_1 = 5\mu\text{C}$ ,  $q_2 = -10\mu\text{C}$  and  $q_3 = 15\mu\text{C}$  are placed in the corners of an equilateral triangle with sides  $l = 50\text{ cm}$ . The potential energy of the system is

- A 2.25 J
- B 0.25 J
- C - 2.25 J
- D - 4.25 J



f) The potential energy of two electrons with a mutual distance  $1\text{ \AA}$  ( $= 10^{-10}\text{ m}$ ) is [ $1\text{ eV} = 1.6 \cdot 10^{-19}\text{ J}$ ]

- A 14.4 meV
- B 14.4 eV
- C 14.4 keV
- D 14.4 MeV

g) A beryllium nucleus with charge  $4e$  and mass  $9m_p$  and an  $\alpha$  particle (i.e., a helium nucleus) with charge  $2e$  and mass  $4m_p$  are both at rest. The two particles can be brought to equal speed by

- A accelerating them through an equal potential difference.
- B accelerating the  $\alpha$  particle through  $V$  volts and the beryllium nucleus through  $V/2$  volts.
- C accelerating the  $\alpha$  particle through  $V$  volts and the beryllium nucleus through  $8V/9$  volts.
- D accelerating the  $\alpha$  particle through  $V$  volts and the beryllium nucleus through  $9V/8$  volts.